

Fractions

Read the words below.

adore
dislike
devoted
affection
annoy
tenderness
detest

What fraction of the words
are synonyms for love?

1...

Fractions

There are a total of 8
candy hearts. $\frac{1}{2}$ of the
candy hearts say "Cutie
Pie." The other $\frac{1}{2}$ say "Miss
You." How many candy
hearts say "Cutie Pie?"

2 ...

Fractions


Read the words below.

Be Mine

What fraction of the letters
are vowels?

3...


Fractions



What fraction of the hearts
are broken?

4 ...

Fractions



What fraction of the boys are carrying Valentines?

5...

Fractions

Read the words below.

candy
chocolate
light bulbs
flowers
Valentine cards

What fraction of the words are popular gifts on Valentine's Day?

6...

Fractions

There are 4 Valentine's Day Cards. $\frac{1}{2}$ of the cards are red. $\frac{1}{2}$ of the cards are polka dotted. How many of the cards are red?

7...

Fractions

Read the words below.

Happy Valentine's Day

What fraction of the letters are capitalized?

8...

Fractions

Read the words below.

love
arrow
baseball
wings
clock

What fraction of the words
have to do with Cupid?


9...

Fractions

There are a total of 10
kids. $\frac{1}{2}$ of the kids brought
chocolate for Valentine's
Day. The other $\frac{1}{2}$ of the
kids have candy hearts.
How many kids have candy
hearts?

10...

Fractions



What fraction of the
hearts have wings?

11...

Fractions

Read the word below:

Valentine

What fraction of the letters
are consonants?

12...

Fractions



What fraction of the animals are holding flowers?

13...

Fractions

Read the words below.

tulip
rose
daisy
lily
chocolate
carnation
lilac
orchid

What fraction of the words are names of flowers?

14...

Fractions

Read the words below.

Cupid's arrow

What fraction of the letters are vowels?

15...

Fractions

There are 6 pieces of candy.
Jacob ate $\frac{1}{2}$ of the candy.
How many pieces of candy are left?

16...

Fractions


Read the words below.

magenta
scarlet
black
forest green
crimson
fuchsia
lime green

What fraction of the colors are shades of red or pink?

17 ...

Fractions



What fraction of the hearts have arrows?

18 ...

Fractions

There are 12 students. $\frac{1}{2}$ of the students brought candy for Valentine's Day, and the other $\frac{1}{2}$ brought Valentines. How many students brought candy?

19 ...

Fractions

Read the words below.

bouquet of flowers

What fraction of the letters are consonants?

20 ...



Valentine's Day Fractions Answer Sheet



1.	
2.	
3.	
4.	
5.	
6.	
7.	
8.	
9.	
10.	

11.	
12.	
13.	
14.	
15.	
16.	
17.	
18.	
19.	
20.	